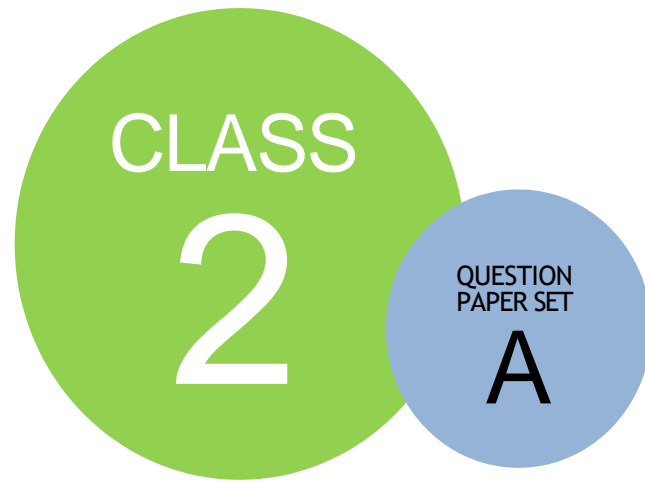


SCO INTERNATIONAL SCIENCE  
OLYMPIAD 2023-24



DO NOT OPEN THIS BOOKLET UNTIL ASKED TO DO SO

### Guidelines for the Candidate

1. Before the exam begins, you will have an additional 20 minutes to complete the OMR Sheet with personal information.
2. On the OMR Sheet, clearly write your name, **school code, class, roll number, and mobile number**.
3. Four sections make up the question paper:


**General Math** (20 Questions), **Reason/Assertion** (5 Questions), **Case Study** (5 Questions) and **Achievers Section** (5 Questions). Each question in Achievers Section carries 2 marks, whereas all other questions carry one mark each.

4. Every inquiry must be answered. There are no failing grades. Calculator use is not allowed.
5. There is just ONE right response. Select ONE response choice only.
6. Use only an HB pencil or a blue or black ballpoint pen to indicate your choice of responses by darkening the corresponding circles on the OMR Sheet. E.g.

**Q.1: What is the capital of India?**

A. Kolkata B. Mumbai C. Delhi D. Chennai

You must shade the circle next to option C on the OMR Sheet since that is the right response.




































7. At the conclusion of the test, hand over the OMR Sheet to the Invigilator.
8. Before attempting the paper, kindly provide your personal information in the box provided on this page. .

































Name:.....


















Registration ID:..... Contact No.:.....

1.	<p>_____ protects our body from insects, dust, and heat.</p> <div>     </div> <p>A. Clothes      B. Umbrella      C. Food      D. Paper</p>
2.	<p>Identify the above-shown vehicle.</p>  <p>A. Camel cart      B. Car      C. Bullock cart      D. Bicycle</p>
3.	<p>Which of the vehicles is suitable to cross the river?</p> <div>     </div> <p>A. Car      B. Bus      C. Bicycle      D. Boat</p>
4.	<p>Which of the following can be used to communicate your thoughts to others in written form?</p> <div>    </div> <p>A. Letter      B. Television      C. Radio      D. None of these</p>
5.	<p>We get nutrition from the _____.</p> <div>     </div> <p>A. Food      B. Clothes      C. Home      D. only green vegetables</p>
6.	<p>Select the food we get from the plant.</p>










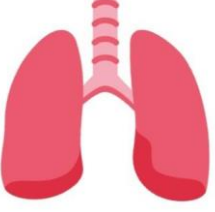

	    <p>A. Egg      B. Meat      C. Tomato      C. Milk</p>
7.	<p>Which type of house is found in very cold places?</p>     <p>A. Igloo      B. Apartment      C. Houseboat      D. Caravan</p>
8.	<p>_____ can be easily folded and moved from one place to another.</p>     <p>A. Tent      B. Apartment      C. Kutch house      D. Bungalow</p>
9.	<p>In which season the below-given dress can be worn?</p>      <p>A. Summer      B. Winter      C. Spring      D. Monsoon</p>
10.	<p>Select the option which is related to the post office.</p>





	   <p>A. Books      B. Letter      C. Smartphone      D. None of these</p>
11.	<p>Select the dress to go to the school.</p>     <p>A. Coat      B. Gown      C. Raincoat      D. Uniform</p>
12.	<p>Which of the following statements is incorrect about the above-shown image?</p>  <p>A. We wear different clothes in different seasons.  B. We wear different clothes for different occasions.  C. Clothes protect from thieves.  D. Clothes protect us from dust.</p>
13.	 <p>Which of the following organs is related to the image above?</p> <p>A. Heart      B. Leg      C. Hand      D. Eyes</p>
14.	<p>Select the food which is rich in starch.</p>     <p>A. Potato      B. Egg      C. Apple      D. Milk</p>
15.	<p>Siya wants to go to school, but it is raining outside. Her mother told her to wear</p>

	<p>_____ to protect herself from the rain.</p> <div>     </div> <p>A. Umbrella    B. Raincoat    C. Sweater    D. Jacket</p>
16.	<p>In a fancy day competition, students wear different clothes and give speeches on the stage. Riya tells a riddle on the stage, below is the riddle given. I catch thieves and protect the people. Guess who I am?</p> <div>     </div> <p>A. Doctor    B. Police officer    C. Teacher    D. Actress</p>
17.	<p>_____ bird is used to send messages in the form of letters from one place to another.</p> <div>     </div> <p>A. Crow    B. Pigeon    C. Parrot    D. Duck</p>
18.	<p>Christy wants to go outstation for the holidays. She has only 3 days' holiday and she does not want to waste her time traveling. Select the transport through which Christy reaches an outstation in less time.</p> <div>     </div> <p>A. Ship    B. Car    C. Bus    D. Aeroplane</p>
19.	<p>_____ is the galaxy in which _____ exists.</p> <div>  </div> <p>A. Andromax    B. Saturn    C. Milky way    D. Black hole</p>
20.	<p>Which of the festivals is related to the farmers?</p>

	    <p>A. Onam      B. Holi      C. Diwali      D. Independence day</p>
21.	<p>While staring at the day sky, Jimmy pointed out and said to his mother that it is the nearest star to the Earth. Choose the object that Simmy points out.</p>     <p>A. Sun      B. Moon      C. Saturn      D. Clouds</p>
22.	<p>Jiya wants a pet which gives her milk. Her mother gave her a list of animals to choose from for her pet. Her mother suggested she should choose a pet which is smaller and easy to handle. Which of the pets Jiya should choose?</p>     <p>A. Buffalo      B. Cow      C. Turtle      D. Goat</p>
23.	<p>Plants require _____ to grow properly.</p>     <p>A. Fruit      B. Water      C. Juice      D. Clothes</p>
24.	<p>Earthworms move from one place to another with the help of _____.</p>  <p>A. Bones      B. Legs      C. Muscles      D. Tail</p>
25.	<p>Select the important festivals of Sikhs .</p>



	 <p>A. GURPURAB      B. Eid      C. Diwali      D. Holi</p>
26.	<p>Teacher told the student that in _____ we celebrate the victory of good over evil.</p> <div>     </div> <p>A. Dussehra      B. Eid      C. Republic Day      D. Christmas</p>
27.	<p>We can see the heavenly objects with the help of _____.</p> <div>     </div> <p>A. telescope      B. Computer      C. Smartphone      D. Magnifying glass</p>
28.	<p>Rohan hears that in the breathing process lungs play an important role, but he is not able to see the lungs in her body. Her mother explains that some organs that we do not see are called _____ organs.</p>  <p>A. Sense organs      B. External organs      C. Internal organs      D. Invisible organs</p>
29.	<p>Identify the above-given body part.</p>  <p>A. Knee      B. Elbow      C. Ankle      D. Wrist</p>

30.	<p>Rahul leg is injured, what he cannot do, till his injury will recover?</p>  <p>A. Eating breakfast   B. Writing   C. Singing   D. Kicking</p>
31.	<p>Person who drives the ship is called_____.</p>  <p>A. Pilot   B. Captain   C. Doctor   D. Driver</p>
32.	<p>During floods, which of the following can be used to deliver medicines, water and food to people?</p>  <p>A. Car   B. Helicopter   C. Cycle   D. Bus</p>
33.	<p>Which of the following depends on humans for food?</p>  <p>A. Dog   B. Lion   C. Elephant   D. Fox</p>
34.	<p>What helps to clear waste from our body?</p> <p>A. Eggs   B. Vegetable   C. Water   D. Milk</p>
35.	<p>Children of our parent's friends are called as our:</p> <p>A. Cousin   B. Adopted   C. Friends   D. Siblings</p>



## SPACE FOR ROUGH WORK

1	2	3	4	5	6	7	8	9	10
a	d	d	a	a	c	a	a	b	b
11	12	13	14	15	16	17	18	19	20
d	c	a	a	b	b	b	d	c	a
21	22	23	24	25	26	27	28	29	30
a	b	b	c	a	a	a	c	b	d
31	32	33	34	35					
b	b	a	c	c					



# School Connect Online

Learn Apply Evaluate

[www.schoolconnectonline.com](http://www.schoolconnectonline.com)

