



SCO International
Science Olympiad

Total Questions - 35

Maximum Mark - 105

Duration - 1 hr

	Pattern and Marking Scheme	
No. of Questions	35	-
Marks Per Question	3	

Syllabus	International Science Olympiad (ISO) 2022-23 SET - AH 7
Grade 3	



Total Questions: 35 | Time: 1 hr.

Guidelines for the Candidate

1. You will get additional ten minutes to fill up information about yourself on the OMR Sheet, before the start of the exam.
2. Write your Name, School Code, Class, Roll No. and Mobile Number clearly on the OMR Sheet and do not forget to sign it. We will share your marks / result and other information related to Olympiad exams on your mobile number.
3. The Question Paper comprises sections: reasoning ,subjective, achievers section
4. All questions are compulsory. There is no negative marking. Use of calculator is not permitted.
5. There is only ONE correct answer. Choose only ONE option for an answer.
6. To mark your choice of answers by darkening the circles on the OMR Sheet, use HB Pencil or Blue / Black ball point pen only
7. Rough work should be done in the blank space provided in this booklet.
8. Return the OMR Sheet to the invigilator at the end of the exam.
9. Please fill in your personal details in the space provided on this page before attempting the paper.

1. 'Bread' is related to flour in the same way as 'Furniture' is related to -----
 - a. things
 - b. dress
 - c. wood
 - d. decoration
2. 16, 20, 18, 25, 20, 30, -----, 35
 - a. 30
 - b. 32
 - c. 22
 - d. 40

3. Which of the following uses a magnet?



a.



b.



c.



d.

4. If banana is cbobob and strawberry is tusbxcfssz then Pomegranate is -----
 - a. Rpnfhsbpsuf
 - b. Rqnfisbsbtfi
 - c. Rlohsthdhik
 - d. Rpnfhsbobuf
5. Which clothes are best suited for the summer season -----
 - a. Woollen clothes
 - b. Cotton dresses
 - c. Silk dresses
 - d. All of these

6. What is missing from given pattern?

1J0, 1M3, 2V2, -----, 2Y5

- a. 2R4
- b. 1S6
- c. 1S9
- d. 2R3

7. Find the odd one out.



8. If yesterday is Sunday, the day after tomorrow is -----.

- a. Wednesday
- b. Tuesday
- c. Thursday
- d. Monday

9. The lady you saw me with is my aunt. Her mother is my -----.

- a. Niece
- b. Grandmother
- c. Mother
- d. Daughter-in-law

10. There are 28 books. 4 books are distributed to 6 students. How many books are remaining?


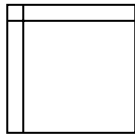
- a. 2
- b. 4
- c. 6
- d. 8

11. Find the odd one out.

a.

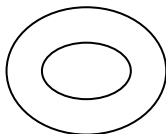


b.

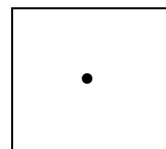
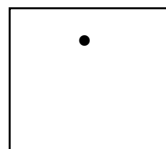


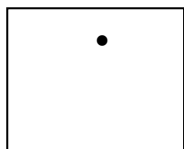


c.

d.



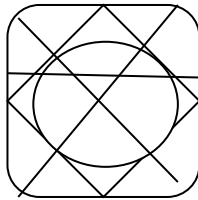
12. Look at this pattern of shapes.




Which of these shows the same kind of pattern?





- a. KKLKL
- b. KLKLK
- c. KLLKL
- d. LKLKL

13. Which of the following alphabets is hidden in the given figure?



- a. A, X, V, O, C, G, R
 - b. O, V, X, A, Y, C, N
 - c. W, T, A, O, M, K
 - d. J, G, O, N, M, D, Q
14. If umbrella is called van, van is called car, car is called house, house is called school, then Ragul lives in big -----.
- a. van
 - b. car
 - c. house
 - d. school
15. A group of friends are standing in a line to get a ticket. There 25 men and Vaishnavi is in the middle. What is her position from the end of the line?
- a. 14
 - b. 12
 - c. 13
 - d. 15

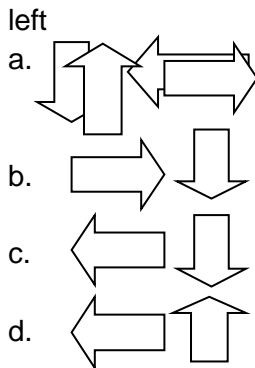
16.  : hockey then -----: shuttle

- a. 
- b. 
- c. 
- d. 

17. If Keerthana's summer vacation starts on 16th September and goes on till the end of the month. She goes to karate class only on even days. Then how many days does she go to the class?



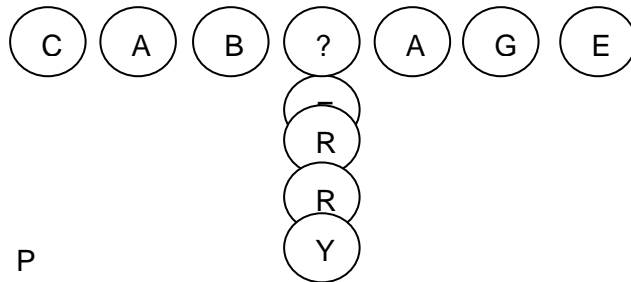
- a. 6
b. 7
c. 8
d. 9
18. Direction: Which of the following options show the correct mirror image of the given figure, if the mirror is placed on the left side?



19. If 3:9 then 4:-----

- a. 8
b. 16
c. 24
d. 10

20. Which letter from the given options will replace the question mark (?) to form one name of vegetable and one name of fruit?



- a. P
- b. B
- c. I
- d. H

21. Geography means -----

- a. study of places
- b. relationship between people and their environments
- c. physical properties of earth's surface
- d. All of the above

22. The sprouting of a seed is called -----.

- a. Germination
- b. Pollination
- c. Absorption
- d. Formation

23. Birds -----.

- a. cannot fly
- b. don't have teeth
- c. doesn't have any sense
- d. are not social creatures

24. We cannot survive without food because -----.


- a. Relishing a dish is a source of pleasure
- b. Consuming food is essential for energy
- c. Eating edible things can make you stay young
- d. Aging is inevitable without the help of food

25. A matter is made up of ----- and molecules.
- a. stone
 - b. atom
 - c. nucleus
 - d. electron
26. Find the odd one out.
- a. earthquake
 - b. drought
 - c. rain
 - d. volcano eruption
27. A leap year comes for every ----- years.
- a. 2
 - b. 3
 - c. 4
 - d. 5
28. Which is not a sea animal from the following options?
- a. Lobster
 - b. Octopus
 - c. Squid
 - d. Squirrel
29. An edible item means -----.
- a. something that cannot be artificially made
 - b. Anything which is made up of plants
 - c. Nothing without the taste of salt
 - d. Everything that is eatable
30. Human beings have ----- senses.
- a. five
 - b. six
 - c. four
 - d. three
31. Which animal doesn't have a night vision?
- a. Owls
 - b. Bats
 - c. Deer
 - d. Fox
32. ----- is the primary producers in the food chain.
- a. Plant
 - b. Wild animal
 - c. Bird
 - d. Insect

33. All snakes are poisonous.

- a. True
- b. False
- c. Neither true nor false
- d. Cannot be determined

34. Clouds are made up of -----



- a. Water vapour
- b. Sedimentation
- c. Crystallization
- d. Moulded ice

35. Nearly three-fourths of the Earth's surface is covered with-----.

- a. Land
- b. Trees
- c. Desert
- d. Water

SPACE FOR ROUGH WORK



School Connect Online

Learn Apply Evaluate

www.schoolconnectonline.com



SCO International English Olympiad 2022-23

